






$$2 - 1 = 1$$



$$4 - 2 = ?$$



$$5 - 3 = ?$$



$$6 - 5 = ?$$



$$3 - 1 = ?$$



$$3 - 2 = ?$$