



$$4 - 1 = 3$$




$$3 - 1 = ?$$




$$4 - 2 = ?$$



$$5 - 1 = ?$$



$$2 - 1 = ?$$



$$4 - 3 = ?$$